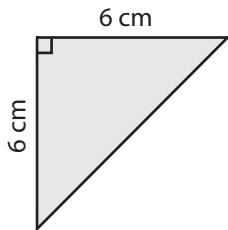


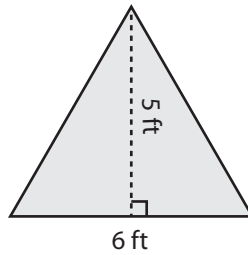
Triangle - Area

Find the area of each triangle.

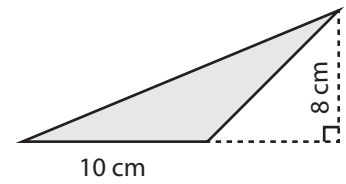
1)

Area =

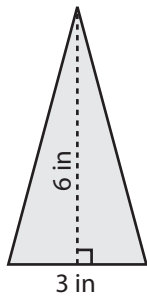
2)

Area =

3)

Area =

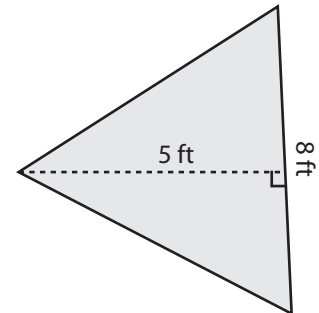
4)

Area =

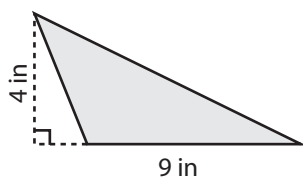
5)

Area =

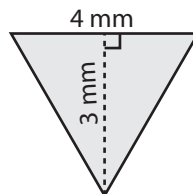
6)

Area =

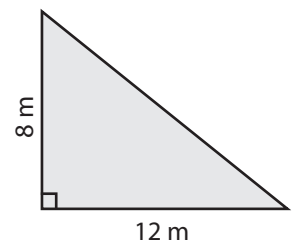
7)

Area =

8)

Area =

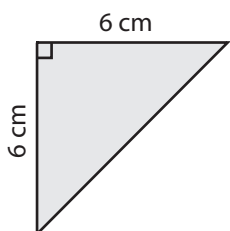
9)

Area =

Answer Key

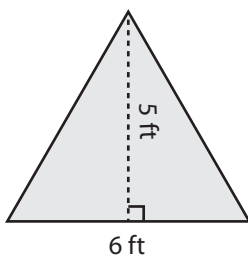
Find the area of each triangle.

1)



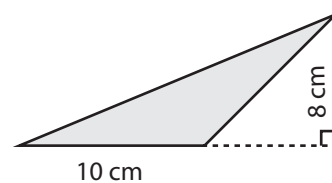
Area = **18 cm²**

2)



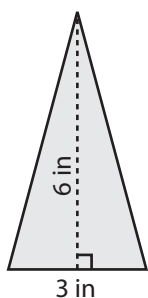
Area = **15 ft²**

3)



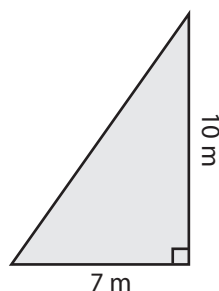
Area = **40 cm²**

4)



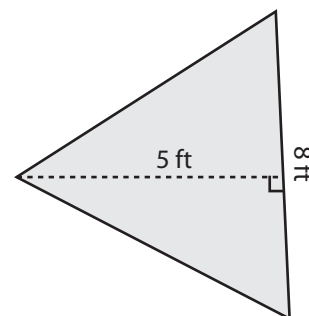
Area = **9 in²**

5)



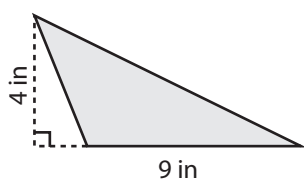
Area = **35 m²**

6)



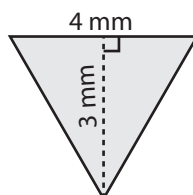
Area = **20 ft²**

7)



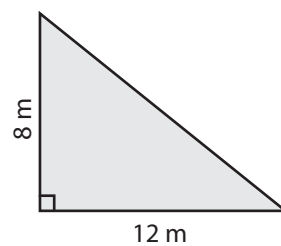
Area = **18 in²**

8)



Area = **6 mm²**

9)



Area = **48 m²**